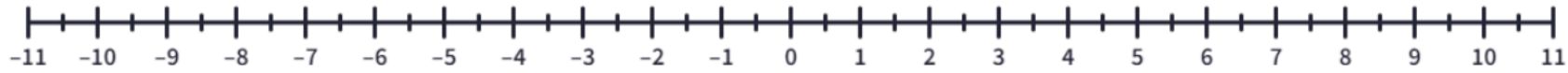
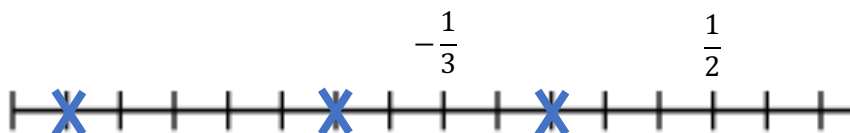
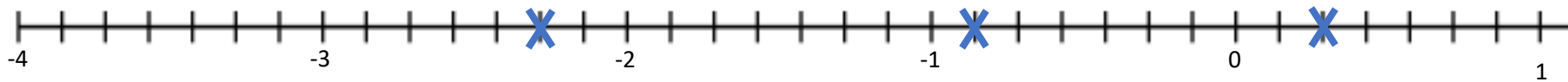


Negative numbers

- 1) Mark on the position of -4 , 6.5 , -6.5 and -0.5 on the numberline below



- 2) Write down the value of each point marked with an X



Where is Zero? Mark the approximate position of zero on each number line.

Please be aware, some of the number lines in this task are not drawn in the conventional way.

